

SHARDEIN SCHOOL
ANNUAL EXAMINATION (2022-23)
SUBJECT : ART & CRAFT
CLASS – II

MM : 50


General Instructions :

- a) *Attempt all the questions.*
- b) *Label of your name, class, section on art sheet and craft properly.*
- c) *Use the medium (colours) as given.*


Q1. Draw and colour the scene. (any one) (15)

‘Snail Scene’ or ‘Duck Scene’

Q2. Colour the given picture. (10)



Q3. Join the different lines to complete it and colour it. (10)



SHARDEIN SCHOOL
ANNUAL EXAMINATION (2022-23)
CLASS – II
SUBJECT : E.V.S

MM : 80

Q1. Give answer in one word. (10)

- a) Name any one water transport. - _____
- b) When do we celebrate Republic Day? - _____
- c) Name any one wild animal. - _____
- d) Name any one helper in the school. - _____
- e) Which season is having long days? - _____
- f) Name any one national festival. - _____
- g) Which season is called Basant in India? - _____
- h) Give an example of herbivores animal. - _____
- i) A baby goat is known as. - _____
- j) The day that comes after Saturday. - _____

Q2. Fill in the blanks. (10)

- a) A plateau is also called a _____.
- b) In _____, plants bear bright colourful flowers.
- c) _____ guard our homes.
- d) Bihu is celebrated in _____.
- e) The number we dial to call the police _____.
- f) _____ are used to travel short distances on water.
- g) We can withdraw _____ at all hours from the ATMs.
- h) _____ is an important festival of Kerala.
- i) We get honey from _____.

j) The day after Monday is _____.

Q3. Circle the odd one out. (5)

- | | | |
|-----------|----------|--------------|
| a) Van | Ship | Car |
| b) Diwali | Eid | Republic Day |
| c) Summer | Weather | Winter |
| d) Bank | Hospital | Clerk |
| e) North | West | Monday |

Q4. Matching. (5)

- | | |
|-----------|----------------|
| a) Diyas | Wool |
| b) Sheep | Diwali |
| c) Spring | Land transport |
| d) Bus | Chatters |
| e) Monkey | February |

Q5. Tick the correct answer. (8)

- a) We wear heavy woolens in summer / winter.
- b) The Sun rises in the East / North.
- c) The Earth is round / square in shape.
- d) A bird / dog chirps.
- e) We make coffee / tea from the leaves of the tea plant.
- f) Independence day is celebrated on 26 January / 15 August.
- g) When there is a fire, we call the dispensary / firestation.
- h) Boats are used to travel short / long distances on water.

Q6. Answer the following questions in short.

(14)

a) Name a few vehicles used in the cities.

b) Name any four items that you can buy from a market.

c) Name any four joyous festivals of India.

d) Which festival is celebrated at the end of Ramzan?

e) Which plant do we get quinine from?

f) Which animals give us wool?

g) How many seconds make one minute?

Q7. Answer the following questions in long.

(18)

a) Name the seven days of a week.

b) Which area is called neighbourhood?

c) What are known as means of transport?

d) What are deserts?

e) What is season?

f) How do you celebrate Diwali?

Q8. Draw, colour and label the following diagrams. (10)

a) 2 Things/Clothes related to summer season

b) Things you get from plants

SHARDEIN SCHOOL
ANNUAL EXAMINATION (2022-23)
SUBJECT : ENGLISH
CLASS – II

MM : 80

A1. Read the passage and answer the following questions. (10)

Aarti is Manu's best friend. She is getting ready to go to Manu's birthday party in the evening. She bought a big book of stories as a birthday gift for Manu. Aarti wants to wrap it in red colour paper. She knows that red is Manu's favourite colour. She can't find any red paper. Aarti is sad. Looking at Aarti's sad face her mother told her to wrap the gift in her red scarf! Aarti was delighted.

a) Who is Manu's best friend?

b) Where is Aarti going in the evening?

c) What gift Aarti has for Manu?

d) Which is Manu's favourite colour?

B2. Complete the story. (5)

(Hints- food, jumped, high, grapes, hungry)

A fox was _____. He looked for _____.
He saw a bunch of _____. He _____ to
get them. But grapes were very _____. He could not
reach them.

SECTION – C : GRAMMAR

C1. Underline the proper noun and circle the common noun. (2)

a) Aarav is my brother.

b) Delhi is a big city.

C2. Write the plural of. (2)

a) Day - _____

b) Horse - _____

C3. Underline the adjectives. (2)

a) The flowers are pretty.

b) This apple is red and juicy.

C4. Fill in the blanks with a or an. (2)

a) _____ aeroplane.

b) _____ table.

C5. Underline adverbs. (2)

a) The Children ate quickly.

b) Anu is singing sweetly.

C6. Write the antonyms of. (1)

a) Before - _____

b) Start - _____

C7. Fill in the blanks with (is / am /are). (2)

a) I _____ happy.

b) She _____ my sister.

C8. Underline pronouns. (2)

a) We are very happy.

b) He goes to office.

C9. Fill in the blanks with (has / have). (2)

a) Neha _____ a blue cycle.

b) We _____ a small garden.

C10. Fill in the blanks with (was / were). (2)

a) He _____ my friend.

b) They _____ in the car.

C11. Fill in the blanks with the simple past form of the verbs given in brackets.

a) We _____ (wash) the car last Sunday.

b) It _____ (rain) heavily last evening.

C12. Underline prepositions. (2)

a) The girl is in the boat.

b) The bird is on the roof.

C13. Tick the correct option. (2)

a) Where are you going (.) / (?)

b) I love my pet dog (.) / (?)

C14. Fill in the blanks with (and/but/or/because). (2)

a) Summers are hot _____ sunny.

b) I want to play cricket _____ it is raining.

C15. Fill in the blanks with the present continuous form of the verbs given in brackets. (2)

a) The students _____. (play)

b) I _____. (sleep)

C16. Punctuate the following sentence. (1)

a) this apple is bitter

C17. Matching. (4)

a) Key Writing

b) Hand Flower

c) Sun Path

d) Foot Board

C18. Rewrite the sentences using a question mark (?) or an exclamation mark (!) at the end. (2)

a) How big is your bag

b) Watch out

C19. Fill in the blanks with 'there' or 'their'. (3)

a) _____ are twenty desks in my classroom.

b) They are looking for _____ seats in the hall.

c) _____ is a public library at the end of this street.

C20. Underline the incorrect word and write it correctly. (2)

a) The cat came and sat on my sholder. _____

b) She plays the gitar well. _____

C21. Insert commas (,) in the following sentences, where needed. (3)

a) Sheena Priya Aman and Neha went to the park together.

b) The baker sells cakes pastries biscuits and pies.

c) Boats ships and submarines help us travel in water.

C22. Fill in the blanks. (2)

a) The rose is a _____ (flower/flowers).

b) The bowl is full of _____ (sugar/sugars).

SECTION – D : LITERATURE

D1. Answer the following questions.

(14)

a) Do you think the fox was clever?

b) What was inside the parcel that Vinod found?

c) Why does the moon look like the clock?

d) How many creatures did Cristina meet?

e) What do you do when you are happy?

f) How did John and Mariam take out the shell from the sand?

g) What did Alice see on the sides of the well?

SHARDEIN SCHOOL
ANNUAL EXAMINATION (2022-23)
SUBJECT : G.K.
CLASS – II

MM : 40

Q1- Name them. (10)

a) 2 Gadgets - _____ , _____

b) 2 National leaders - _____ , _____

c) 2 Endangered animals - _____ , _____

d) 2 Indian Monuments - _____ , _____

e) 2 Parts of the bicycle - _____ , _____

f) 2 Popular sports - _____ , _____

g) 2 states of India - _____ , _____

h) 2 Spices - _____ , _____

i) Famous places in India - _____ , _____

j) 2 things used in the kitchen - _____ , _____

Q2. Fill in the blanks. (5)

a) _____ is the world's slowest mammal.

b) Water falls on land as rain and _____.

c) _____ is the longest beach in India.

d) _____ is the fastest land animal.

e) The capital of Australia is _____.

Q3. Write True / False : (5)

a) The strongest muscles in our body are present in the jaw. (_____)

b) Heart pumps blood to all parts of the body. (_____)

c) There are 10 years in a decade. (_____)

d) Taj Mahal is the most beautiful monument of the world. (_____)

e) China hosted the 2020 Paralympic Games. (_____)

Q4. Matching. (5)

a) Group of dogs Famous scientist

b) P.V. Sindhu Pack

c) Dr. Stephen Hawking Badminton player

d) Largest delta Mars

e) Red planet Sunderbans

Q5. Tick the correct answer. (5)

a) A bony cage that protects the heart and lungs.

a. Skeleton

b. Ribcage

b) Famous person from the world of entertainment.

a. Shah Rukh Khan

b. Narendra Modi

c) Which animal has a long nose and a large body ?

a. Tapir

b. Seal

d) How often does the Football World Cup take place?

a. Every five years

b. Every four years

e) Which bug is also known as 'white ants'?

a. Lice

b. Termites

Q6. Answer in one word.

(5)

a) Which is the world's longest river?

b) Name the famous waterfall in Karnataka.

c) In which season number of flowers bloom?

d) How many seconds make a minute?

e) Which is the shortest month in a year?

Q7. Circle the odd one out.

(5)

a) Pencil

Book

School bag

Bed

b) June

April

Monday

December

c) Mosquito

Spider

Ladybug

Lion

d) Lotus Temple

India Gate

Delhi

Red Fort

e) Hockey

Ludo

Football



Boxing

SHARDEIN SCHOOL
ANNUAL EXAMINATION (2022-23)
SUBJECT : MATHS
CLASS – II

MM : 80

Q1. Fill in the blanks.

(20)

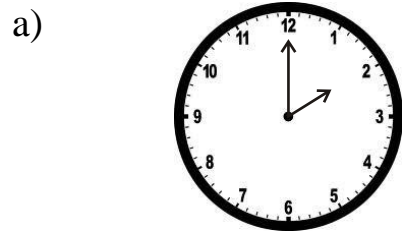
- a) _____ one – fourth make a whole.
- b) In $5\overline{)15^3}$, quotient is _____.
- c) The answer of multiplication sum is called _____.
- d) Two Rs. 30 notes make Rs. _____.
- e) Sixth day of the week is _____.
- f) Triangle has _____ sides and _____ corners.
- g)  _____ 
- h) 1 km = _____ m (100 / 1000)
- i) _____ paise make 2 rupee.
- j) The length of a rope is measured in _____. (m / cm)
- k) _____ follows july.
- l) _____ ten rupees note make Rs. 30.
- m) $4 \times 5 =$ _____
- n) Cuboid has _____ faces and _____ edges.
- o) July has _____ days.
- p) $6/10$ can be written as _____.
- q) Double of 9 is _____.

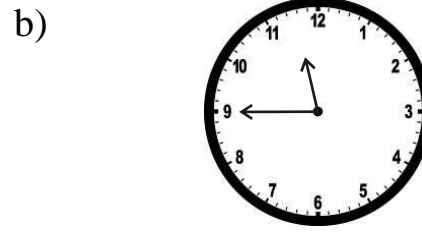
r) There are _____ days in a leap year.

s) Division is _____ distribution.

t) $30 \div 6 =$ _____


Q2. Write the time. (3)



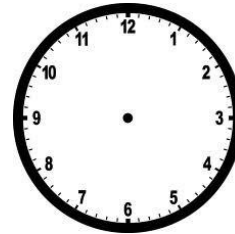


Q3. Draw hands. (3)

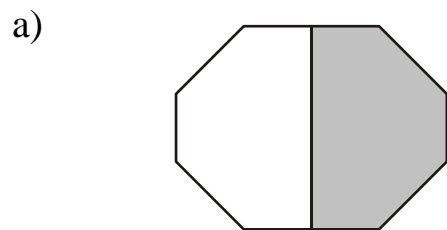
a) 9 o'clock

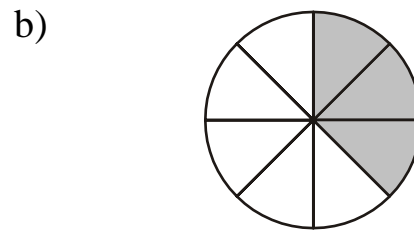


b) Half past 10




Q4. Write the shaded fraction. (3)



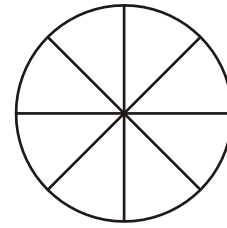


Q5. Shade the figure according to given fraction. (2)

a) $\frac{3}{6}$



b) $\frac{5}{8}$



Q6. Complete the counting. (4)

a) 1301, _____, 1303, _____, _____, 1306, _____

b) 1371, _____, _____, 1374, _____, _____, 1377

Q7. Solve the sums. (8)

a) R s . P

27 50

+ 13 82

b) K g g

9 305

- 4 180

c) 64

x 3

d) $5 \overline{) 20}$

Q8. Complete the pattern. (4)

a) 115, 116, 117, _____, _____, _____, _____

b) 30, 40, 50, _____, _____, _____, _____

Q9. Write in words. (4)

a) Rs. 150 - _____

b) Rs. 65.25 - _____

Q10. Write in figures. (4)

a) Thirty five rupees and twenty five paise. _____

b) Seven hundred rupees and thirty paise. _____

Q11. Compare the following with the sign $>$, $<$, $=$ (4)

a) Length of a matchstick _____ a pencil

b) Capacity of a jug _____ water tank

c) Weight of 6 kg apple _____ 2 kg apple

d) Length of a sari _____ a dupatta

Q12. Word Problems. (16)

a) How many days are there in 20 weeks?






b) A rope is 115 m long and another rope is 186 m long. What is their total length?

c) Rudransh had Rs. 80 in her piggy bank. Out of which she spent Rs. 35. How much money is left with him?

d) Divide 12 cups among in 4 children.

Q13. The following pictograph shows the number of toffees eaten by children.

(5)

Children	No. of Toffees
Neeti	
Priya	
Rahul	
Ansh	
Neha	

a) Write the number of toffees eaten by Rahul.

b) Who ate maximum toffees?

c) Who ate minimum toffees and how many?

d) How many toffees did Priya and Ansh eat?

e) Find the total number of toffees eaten by children.

SHARDEIN SCHOOL
ANNUAL EXAMINATION (2022-23)
SUBJECT : HINDI
CLASS – II

MM : 80

नोट – कार्य को स्वच्छतापूर्वक कीजिए।

प्र०1. निम्नलिखित अपठित गद्यांश को पढ़कर ध्यानपूर्वक प्रश्नों के उत्तर दीजिए। (8)

घने जंगल में बरगद का एक पेड़ था। उस पर अनेक पक्षियों के घोंसले थे। बरगद की जड़ में अनेक चीटियाँ रहती थी। दिन निकलते ही वे सब अपने-अपने काम में जुट जाती थी। सर्दियों के दिन थे। धूप खिली हुई थी। चीटियों की लंबी कतार खाने की तलाश में निकली। खाने की तलाश करते-करते हुए सब इधर-उधर चली गईं।

क) जंगल में किस का पेड़ था?

ख) उस पेड़ पर किसके घोंसले थे?

ग) चीटियाँ कहाँ रहती थी?

घ) चीटियाँ किसकी तलाश में निकली?

प्र०4. शब्दार्थ ।

(8)

- क) ज्यादा - _____
- ख) सदा - _____
- ग) रक्षा - _____
- घ) शुद्ध - _____
- ङ) भेंट - _____
- च) घड़े - _____
- छ) स्वर - _____
- ज) राहत - _____

प्र०5. निम्न प्रश्नों के उत्तर दीजिए ।

(21)

क) माँ ने क्या बनाया?

ख) जादूगरनी क्यों दुखी थी?

ग) भौरे क्या गाते हैं?

घ) रक्षाबंधन किस के पवित्र प्रेम का त्यौहार है?

ङ) चमकू को किस चीज़ का शौक था?

च) पेड़-पौधे पशु-पक्षियों के लिए किस प्रकार उपयोगी हैं?

छ) साक्षी ने अमन को क्या समझाया?

प्र०6. सही उत्तर चुनकर सही का निशान लगाइए।

क) शीबू रास्ते में किसके साथ खेलने लग गया।

मित्रों के

मुर्गों के

बकरियों के

ख) फूलों का गाना कौन गाता है?

हवा

कोयल

भौरे

ग) बारिश में कौन जोर-जोर से गरजता है?

पानी

बादल

सूरज

प्र०7. सही वाक्य पर सही तथा गलत वाक्य पर गलत का निशान लगाइए।

क) जादूगर ने रंगों को गुफा में बंद कर दिया। ()

प्र०8. ये वाक्य किसने कहे?

क) "कच्चा आम तो अचार बनाने में काम आता है।"

प्र०9. समान तुक वाले शब्दों को रेखा चींचकर मिलाइए।

क) अभी

बात

ख) जोर

महक

ग) चहक

तभी

घ) बात

शोर

प्र०10. अं (ँ) और अँ (ँँ) का एक शब्द लिखिए।

क) अं (ँ) - _____

ख) अँ (ँँ) - _____

व्याकरण

(25)

प्र०11. सही कथन पर सही व गलत कथन पर गलत का चिन्ह लगाइए।

क) पक्षी लिखकर अपनी बात समझा सकते हैं। ()

ख) वर्णमाला में 'क' के बाद 'ख' आता है। ()

प्र०12. दिए गए वर्णों से सार्थक शब्द बनाइए।

क) ला सि ग - _____

ख) ता कि ब - _____

प्र०13. संज्ञा शब्दों पर गोला लगाइए।

क) बच्चे खेल रहे हैं।

ख) चिड़िया बैठी है।

प्र०14. सर्वनाम शब्दों पर गोला लगाइए।

क) नीरज मेज पंखा मेरा

ख) तुम आना लाल मीठा

प्र०15. विशेषण शब्द द्वारा खाली स्थान भरिए।

क) तोते की चोंच _____ रंग की होती है।

ख) हाथी _____ होता है।

प्र०16. क्रिया शब्दों के द्वारा खाली स्थान भरिए।

क) धोबी कपड़े _____ रहा है।

ख) माँ खाना _____ रही है।

प्र०17. सही वाक्य के सामने सही व गलत वाक्य के सामने गलत का चिन्ह लगाइए।

क) सप्ताह में आठ दिन होते हैं। ()

ख) वर्ष का पहला महीना जनवरी होता है। ()

प्र०18. निम्न शब्दों के दो-दो पर्यायवाची शब्द लिखिए।

क) आँख - _____ , _____

ख) फूल - _____ , _____

प्र०19. निम्न शब्दों के विलोम शब्द लिखिए।

दिन _____ कच्चा _____

उदय _____ अपना _____

प्र०20. रेखा खींचकर जोड़े बनाइए।

क) बेटा धोबिन

ख) भाई रानी

ग) राजा बेटा

घ) धोबी बहन

प्र०21. एकवचन से बहुवचन बनाइए।

क) केला - _____

ख) नदी - _____