

**SHARDEIN SCHOOL**  
**ANNUAL EXAMINATION (2022-23)**  
**SUBJECT : ART & CRAFT**  
**CLASS – III**

**MM : 50**  
**CRAFT : 15**


**General Instructions :**

- a) Attempt all the questions.
- b) Label of your name, class, section on art sheet and craft properly.
- c) Use the medium (colours) as given.


Q1. Draw and colour the scene. (any one) (15)

‘Mandala Art Scene’ or ‘Koala Bear Scene’

Q2. Colour the given picture. (10)



Q3. Complete the picture using scumbling technique with colours. (10)



**SHARDEIN SCHOOL**  
**ANNUAL EXAMINATION (2022-23)**  
**SUBJECT : ENGLISH**  
**CLASS – III**

**MM : 80**

***General Instructions:***

*i) Attempt all the questions in a neat and clean Handwriting.*

**SECTION – A**

A1. Read the passage given below and answer the following questions. (7)

Charley is a six-year-old boy and he loves the holidays. Whenever his school remains closed, he definitely goes to his maternal grandmother's house with his mother.

He loves his grandmother and his grandmother also loves him very much. When Charley goes to his grandmother's house, she cooks a variety of dishes for him and gives him many toys to play with.

Charlie's most loving thing in his grandmother's house is her pet dog which always stays with Charlie. Charlie not only eats food with the dog but also plays with him most of the time.

When he comes back to his house, his grandmother gives him fifty rupees every time.

**Questions :**

a) Where does Charley like to go when his school is closed?

---

---

b) What is Charley's most loving thing in his grandmother's house?

---

---

c) How old is Charley?

---

---

d) How much money does Charley's grandmother give him every time?

---

---

e) With whom does Charley go to his grandmother's house?

---

---

f) How old Charlie is?

---

---

g) Make a sentence with Grandmother.

---

---

A2-Unseen Poem.

(7)

**The First Day of School**

I've got a brand-new lunchbox.

My shoes are shiny clean.

I've got a cool, new book bag

And a pencil box that's green.

But I don't know my teacher,

Or where my desk will be.  
I don't know if I'll like the kids,  
Or if they'll play with me.  
I peep inside my classroom.  
I stand there for a while.  
My teacher's tall and kind of loud,  
But has a great big smile.  
And, best of all, she's got my  
Favourite book upon the shelf!  
I kiss my mother at the door  
And walk in by myself.

***Answer these questions carefully:***

a) The child's shoes are \_\_\_\_\_.

a. dirty

c. clean

b. comfortable

d. fancy

b) The child has got a pencil box which is \_\_\_\_\_

a. red

c. green

b. yellow

d. pink

c) Find the opposite of the word 'short' from the poem.

---

d) What did the child like about the teacher?

---

---

e) Who came to drop the child at the school?

a. father

c. grandmother

b. teacher

d. mother

f) How did you feel on the first day of your school?

---

---

---

g) What was the best thing that the child found in the class?

---

---

---

**SECTION – B : (WRITING)**

B1. Write a composition on “IF I WERE A DOCTOR”. (6)

---

---

---

---


---

---

---

---





B3. Complete the story with the help of given hints. (7)

( read , write , spectacles , pair , old , village , books )

Once there lived an \_\_\_\_\_ man in a \_\_\_\_\_ . He didn't know how to \_\_\_\_\_ and \_\_\_\_\_. He always notice the people who wore \_\_\_\_\_ while reading \_\_\_\_\_ .

He thought that he must buy a \_\_\_\_\_ of spectacles for himself.

**SECTION – C : (GRAMMAR)**

C1. I) Re-arrange the words to make a proper sentence. (1/2)

a) annoying child is Ram

---

II) Circle the subject and underline the predicate (1/2)

a) The man was dancing near me.

C2. Fill in the blanks with suitable Article. (1)

a) I need \_\_\_\_\_ phone.

C3. Circle the Proper noun. (1)

a) Rama is a beautiful girl.

C4. I) Circle the adjective. (1/2)

a) I have many children.

II) Complete the sentence by using the opposite word of the given word.

a) Rina is \_\_\_\_\_ but Riddhi is (Tall). (1/2)



- C5. Tick the correct Pronoun. (1)
- a) Garima likes \_\_\_\_\_ school. (her/hers).
- C6. Complete the sentence with suitable Demonstrative. (1)
- a) \_\_\_\_\_ is my balloon.
- C7. Circle the correct Adjective. (1)
- a) Much / Many of my friends are dancing.
- C8. I) A Use of comparative and superlative degrees of the given Verb. (½)
- a) Nidhi is \_\_\_\_\_ than shruthi (short)
- II) Complete the sentence with correct Verb. (½)
- a) I \_\_\_\_\_ a student.
- C9. I) Fill in the blanks with Simple Present tense. (½)
- a) All children \_\_\_\_\_ (like/likes) chocolate.
- II) Use Present Continuous tense of the given verb to complete the sentence. (½)
- a) Many of them \_\_\_\_\_ (watch) at me.
- C10. Change the sentence into simple Past Tense. (1)
- a) He was eight years old now.
- C11. Complete the sentence with Simple Future Tense. (1)
- a) The school \_\_\_\_\_ (start) at 8:00 a.m.
- C12. Circle the Adverb. (1)
- a) The mouse ran swiftly.

C13. I) Use suitable Conjunction to complete the sentence. (1/2)

a) I like to play soccer \_\_\_\_\_ cricket.

II) Fill in the correct Preposition to complete the sentence. (1/2)

a) I met him \_\_\_\_\_ may.

C14. Punctuate the given sentence correctly. (1/2)

a) my school is too big

\_\_\_\_\_

C15. Write the names of any 4 weeks in alphabetical order. (1/2)

\_\_\_\_\_

C16. Write Synonyms for the following words. (1/2)

a) Shy - \_\_\_\_\_

b) Trust - \_\_\_\_\_

C17. Complete the Simile. (1/2)

a) As cute as \_\_\_\_\_.

b) As busy as \_\_\_\_\_.

C18. Complete the word with suitable Suffixes. (1)

a) Quick \_\_\_\_\_

b) King \_\_\_\_\_

C19. I) Write S if the sentence is a statement and O if it's an order. (1)

a) Get out! - \_\_\_\_\_

II) Punctuate the sentence. (1)

a) we don't had our lunch today

---

C20. I) Fill in the right word to complete the sentence. (1)

a) Throw the \_\_\_\_\_ into the \_\_\_\_\_. (pin/bin)

II) Who AM I? (1)

a) I treat the patients and give medicines. \_\_\_\_\_

**SECTION – D : (LITERATURE)** (20)

D1. What do Aban and his friends do to help binni?

---

---

---

---

D2. Why was Juan called Juan bobo?

---

---

---

---

D3. How did the pot finally reach Juans home?

---

---

---

---

D4. Where was whale-calf stuck?

---

---

---

---

D5. What season was it?

---

---

---

---

D6. Who wanted to play hide and seek?

---

---

---

---

D7. What was the colour of fabric that Gabriel bought from the market?

---

---

---

---

D8. What did the tree given to the speaker and his family?

---

---

---

---

D9. Who do you think we and us refers to?

---

---

---

---

D10. According to Zohar, What does Mika use the apron for?

---

---

---

---

**SECTION – E : (STORY)**

**(6)**

E1. What do Moyna want to do with Bini?

---

---

---

---

E2. Who was Abaan?

---

---

---

---

E3. Who was trying to chase Bini?

---

---

---

---

E4. Who were Bini and Bilu?

---

---

---

E5. What does the Moth do all night?

---

---

---

---

E6. What does the butterflies do during the day?

---

---

---

---

**SHARDEIN SCHOOL**  
**ANNUAL EXAMINATION (2022-23)**  
**SUBJECT : E.V.S.**  
**CLASS – III**

**MM : 80**

Q1. Tick the correct answer.

(10)

a) We eat the \_\_\_\_\_ of stem.

- |           |           |
|-----------|-----------|
| a. Leaves | b. Stem   |
| c. Roots  | d. Fruits |

b) Chewing the cud is seen in \_\_\_\_\_.

- |        |         |
|--------|---------|
| a. Cow | b. Lion |
| c. Fox | d. Cat  |

c) A very tall building containing offices or flats \_\_\_\_\_.

- |                |            |
|----------------|------------|
| a. Sky scraper | b. Hut     |
| c. Igloo       | d. Caravan |

d) Which kind of fuel is used for producing heat in LPG gas stove?

- |            |                 |
|------------|-----------------|
| a. LPG gas | b. Kerosene oil |
| c. Wood    | d. None         |

e) Green colour is used to show \_\_\_\_\_.

- |         |          |
|---------|----------|
| a. land | b. Water |
| c. Air  | d. None  |

f) Plants grow in water called \_\_\_\_\_ plants.

- |            |                |
|------------|----------------|
| a. Aquatic | b. Desert      |
| c. Land    | d. Mountaneous |



g) Cell phone is also known as \_\_\_\_\_.

- a. Land line
- b. Mobile phone
- c. Internet phone
- d. None

h) We use this pottery item for drinking the tea \_\_\_\_\_.

- a. Handi
- b. Diya
- c. Kulhad
- d. Ghara

i) \_\_\_\_\_ is a popular dress worn in Punjab.

- a. Salwar kameez
- b. Phiran
- c. Saree
- d. Odhini

j) \_\_\_\_\_ controls the movement of traffic at road crossing.

- a. Army officer
- b. Traffic police
- c. Doctor
- d. Teacher

Q2. Fill in the blanks.

(15)

a) We get \_\_\_\_\_ from the leaves of the tea plant.

b) A microwave oven runs on \_\_\_\_\_.

c) We use \_\_\_\_\_ and \_\_\_\_\_ to get rid of unwanted animals in our house.

d) When we look at a map, its top part shows the \_\_\_\_\_ direction.

e) The kitchen should have a good \_\_\_\_\_ or \_\_\_\_\_ fan to drive away any smoke.

f) Plants need water to make their \_\_\_\_\_.

g) \_\_\_\_\_ is used to send money from one place to another.

h) \_\_\_\_\_ is an example of water transport.

i) \_\_\_\_\_ is a popular dress worn in Rajasthan.

j) \_\_\_\_\_ is the main source of water on earth.

k) Rainwater that seeps into the earth is called \_\_\_\_\_.

l) \_\_\_\_\_ and \_\_\_\_\_ are example of mass communication.

m) Boiling involves cooking food in hot boiling \_\_\_\_\_.

n) A Snake \_\_\_\_\_ its food without chewing.

o) A picture or shape used to represent something is called \_\_\_\_\_.

Q3. Write answer in one word. (10)

a) Where do we get our food from? \_\_\_\_\_

b) A piece of equipment used for both roasting & baking \_\_\_\_\_

c) A pattern or design made on the floor of a house. \_\_\_\_\_

d) An example of scavengers \_\_\_\_\_

e) Colour used to show river or water bodies on a map. \_\_\_\_\_

f) Which is the cheapest means of communication? \_\_\_\_\_

g) Who is the head of the post office? \_\_\_\_\_

h) Write an example of aquatic animals? \_\_\_\_\_

i) Write an example of personal communication? \_\_\_\_\_

j) Give an example of spice? \_\_\_\_\_

Q4. Matching the following. (5)

a) Pakora grows in desert

b) Houses on stilt frying

c) Cactus is used for storing drinking water

d) Surahi south

e) A direction In flooded areas Baking

Q5. Give the reason for the following. (5)

a) Why should we drink lots of water?

---

---

---

b) Why does everyone need a home?

---

---

---

Q6. Write true or false. (5)

a) Cockroach is pest. ( \_\_\_\_\_ )

b) Houses on stilt is a type of modern day. ( \_\_\_\_\_ )

c) We should use a ladle to take out water from the containers. ( \_\_\_\_\_ )

d) Khurja is famous for its pottery. ( \_\_\_\_\_ )

e) A kiln is a kind of Oven. ( \_\_\_\_\_ )

Q7. Define (any two) (5)

a) Ovo-Vegetarian

---

---

---

b) Scavengers

---

---

---

c) Sketch

---

---

---

Q8. Answer the following questions. (15)

a) What do you understand by the means of transport?

---

---

---

b) What is under ground water?

---

---

---

c) Which places are famous for their pottery?

---

---

---

d) What is a map?

---

---

---

e) What should we do to maintain a good shelter for our domestic animals?

---

---

Q9. Draw neat well labelled diagram (any2)

(5)

a) Temporary house

b) Land transport

c) 2 vessel for storing waste

**SHARDEIN SCHOOL**  
**ANNUAL EXAMINATION (2022-23)**  
**SUBJECT : G.K.**  
**CLASS – III**

**MM : 80**

Q1. Name them. (10)

- a) 2 Indian Presidents - \_\_\_\_\_ , \_\_\_\_\_
- b) 2 Kitchen appliances - \_\_\_\_\_ , \_\_\_\_\_
- c) 2 Sources of energy - \_\_\_\_\_ , \_\_\_\_\_
- d) 2 Comic characters - \_\_\_\_\_ , \_\_\_\_\_
- e) 2 metals - \_\_\_\_\_ , \_\_\_\_\_
- f) 2 famous people from the entertainment world  
- \_\_\_\_\_ , \_\_\_\_\_
- g) 2 heavenly bodies - \_\_\_\_\_ , \_\_\_\_\_
- h) 2 Folk dances - \_\_\_\_\_ , \_\_\_\_\_
- i) 2 Union Territories - \_\_\_\_\_ , \_\_\_\_\_
- j) 2 Famous sports - \_\_\_\_\_ , \_\_\_\_\_

Q2. Fill in the blanks. (5)

- a) \_\_\_\_\_ was the first Indian to go into space.
- b) Pencil leads are made of \_\_\_\_\_.
- c) FIFA World Cup is associated with \_\_\_\_\_.
- d) \_\_\_\_\_ is the hottest planet of the solar system.
- e) The steam engine was invented by \_\_\_\_\_.

Q3. Write True / False: (5)

- a) A mass of ice formed by snow in the mountains is called glacier. ( \_\_\_\_\_ )
- b) Shimla in Himachal Pradesh is the home of Dalai Lama in India. ( \_\_\_\_\_ )
- c) Ctrl + s is used to save a document. ( \_\_\_\_\_ )
- d) There are 365 days in a leap year. ( \_\_\_\_\_ )
- e) Hula is a dance form of Hawaii. ( \_\_\_\_\_ )

Q4. Matching. (5)

- |                 |                    |
|-----------------|--------------------|
| a) Lotus Temple | Marble             |
| b) Taj Mahal    | Delhi              |
| c) Aquaman      | Rajasthan          |
| d) Ghoomar      | India              |
| e) Badminton    | King of seven seas |

Q5. Tick the correct answer. (5)

- a) The first human being to walk on the moon.
  - a. Neil Armstrong
  - b. Vasco Da Gama
- b) What are Covidshield and Covaxin?
  - a. Covid- 19 vaccines
  - b. Dengue vaccines
- c) At an interval of how many years are the modern Olympic Games held?
  - a. 4years
  - b. 5 years
- d) How often does the Football World Cup take place?
  - a. Every five years
  - b. Every four years
- e) Which Indian freedom fighter created the slogan 'Dilli Chalo'?
  - a. Mahatma Gandhi
  - b. Subhash Chandra Bose

Q6. Answer in one word. (5)

- a) Which organ purifies our blood? \_\_\_\_\_
- b) How many sides does a heptagon have? \_\_\_\_\_
- c) Where was the first Cricket World Cup held? \_\_\_\_\_
- d) Who won the silver medal in weightlifting in women's 49 kg category at 2020 Tokyo Olympics? \_\_\_\_\_
- e) What is the full form of the UN? \_\_\_\_\_

Q7. Circle the odd one out. (5)

- a) Ruble                      Rupiah                      Yuan                      Currency
- b) Ursa Major              Galaxy                      Valley                      Alpha Centauri
- c) Salsa                      Ballet                      Hulk                      Flamenco
- d) Lotus Temple              Taj Mahal                      Delhi                      Shanti Stupa
- e) Hockey                      Ludo                      Football                      Badminton



**SHARDEIN SCHOOL**  
**ANNUAL EXAMINATION (2022-23)**  
**SUBJECT : MATHS**  
**CLASS – III**

**MM : 80**

Q1. Very Short Questions : (10)

a) \_\_\_\_\_  $\div 8 = 7$

b) Write the fraction whose numerator and denominator are given as :

Three – Elevenths

c) A solid which has one edges. \_\_\_\_\_

d) A square has \_\_\_\_\_ diagonals of equal lengths.

e) We get \_\_\_\_\_ twenty five rupee notes from one hundred rupee note.

f) Saturday comes before \_\_\_\_\_.

g)  $100 \text{ cm} =$  \_\_\_\_\_  $\text{m}$

h) \_\_\_\_\_ is the unit used to measure heavier objects.

i) There are \_\_\_\_\_ millilitres in one litre.

j) A \_\_\_\_\_ can be expressed in a number of ways.

Q2. Short Questions. (20)

a) Find the quotient and remainder.

$236 \div 2$

b) Arrange the following in ascending order.

$$\frac{2}{6}, \frac{4}{6}, \frac{1}{6}, \frac{6}{5}$$

c) i) Draw a line segment of the given length.

$$AB = 9 \text{ cm.}$$

ii) Count the number of line segments for the given figure.

d) Find the sum by arranging the figures under rupees and paise columns respectively.

$$\text{Rs. } 35, \text{Rs. } 21.50, \text{Rs. } 16.50$$

e) Draw a clock with the given time : Quarter Past 12

f) Convert into seconds : 11 minutes 8 seconds

g) Add the following : 12 m 45 cm + 56 m 40 cm + 31 m

h) Subtract : 45 kg 29 gm from 80 kg 522 gm

i) Multiply the following : 260 gm by 3

j) Convert the following into litres : 5876 ml

Q3. Long Questions.

(30)

a) i) Find the quotient and remainder and verify the answer.

$$587 \div 4$$

ii) Add :  $\frac{2}{4}$  and  $\frac{5}{4}$

iii) Subtract :  $\frac{1}{4}$  from  $\frac{5}{4}$

b) Name any three objects which have flat and curved surfaces.

---

---

---

c) Rajat went for a movie with Rs. 550.65. He spent Rs. 220.75 on the movie ticket. How much money was he left with?

d) I sat down to study at 3:30 p.m. and got up at 7:30 p.m. for how much time did I study?

e) A rope is 39 m 45 cm long. A piece of 15 m 36 cm is cut from it. What is the length of the remaining rope?

f) Ashok bought 7 kg mangoes, 3 kg 850 g melons and 5 kg apples. What is the total weight of fruits bought by him?

g) Vartika has 54 l 520 ml of milk. She sold 27 l 750 ml of it. How much milk is left with her?

h) A car was filled with 30 l 300 ml of petrol. 15 l 850 ml was used in the journey. How much petrol is left?

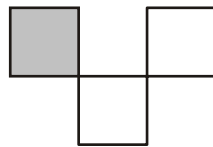
i) Draw a tally marks for the given number of persons.

Main Food	Number of Persons	Tally Marks
Rice	7	
Wheat	12	
Maize	6	
Barley	4	
Ragi	3	
Dal	2	

Q4. Very long questions.

(20)

a) i) Write the fraction for shaded part.



ii) Circle the unit fraction.

$$\frac{7}{2}, \frac{1}{4}, \frac{18}{5}, \frac{1}{7}$$



















iii) Use  $>$  or  $<$  to describe the relationship for the fraction given below.

$$\frac{2}{7} + \frac{3}{7} \quad \square \quad \frac{6}{7} + \frac{1}{7}$$

b) Himani bought a packet of sugar for Rs. 34, flour for Rs. 18.50 and candles for Rs. 11.50. How much change will she get back if she gives a 100 rupee note to the shopkeeper?

c) Ayan school is 12 km 750 m away from his house. He travelled 6 km 500 m by rickshaw and 2 km 250 m by cycle. How much distance is left to reach the school?

d) Study the pictograph carefully and answer the following questions.

	No. of biscuits each child ate
Rajiv	   
Anuj	 
Rohan	   
Aruna	    
Mala	  

Each  , stands for 4 biscuits.

a. How many biscuits did Rohan eat?

---

b. Who ate 20 biscuits?

---

c. Two children ate the equal number of biscuits. Name them.

---



d. Who ate the least number of biscuits?

---

e. How many biscuits did Rajiv and Mala eat altogether?

---

**SHARDEIN SCHOOL**  
**ANNUAL EXAMINATION (2022-23)**  
**SUBJECT : HINDI**  
**CLASS – III**

**MM : 80**

नोट – कार्य को स्वच्छता पूर्वक करें।

प्र०1. निम्नलिखित गद्यांश को ध्यानपूर्वक पढ़कर प्रश्नों के उत्तर दीजिए। (8)

एक बार एक धनी व्यक्ति रिक्शा पर बैठकर बस-स्टैंड की तरफ जा रहा था। उसके पास काफी सामान था। मार्ग में ही उसे वह बस मिल गई, जिस पर वह जाना चाहता था। वह अपना सामान लेकर बस में चढ़ गया। रिक्शे वाले को पैसे देते समय उसका एक थैला रिक्शा में ही छूट गया। रिक्शेवाले की नजर उस थैले पर पड़ी। उसने देखा कि उसमें एक डायरी और पाँच हजार रूपए थे। डायरी में उस आदमी का नाम और पता लिखा था। उस रिक्शेवाले ने डाकघर जाकर उस आदमी के पैसे मनी आर्डर करवा दिए। रिक्शावाला कम पढ़ा लिखा और गरीब था, मगर वह चरित्रवान व्यक्ति था। उसके मन में पराया धन का लालच नहीं आया।

क) धनी व्यक्ति रिक्शा में बैठ कर जहाँ जा रहा था?

---

---

ख) रिक्शेवाले की नजर किस पर पड़ी?

---

---

ग) पैसे देते समय उसका थैला कहाँ छूट गया?

---

---

घ) रिक्शेवाले ने धनी व्यक्ति के पैसे का क्या किया?

---

---





प्र०4. शब्दार्थ ।

(7)

- क) अनुभव - \_\_\_\_\_
- ख) परोपकारी - \_\_\_\_\_
- ग) दरबान - \_\_\_\_\_
- घ) आलसी - \_\_\_\_\_
- ङ) आधुनिक - \_\_\_\_\_
- च) गणना - \_\_\_\_\_
- छ) निर्णय - \_\_\_\_\_

प्र०5. दिए गए प्रश्नों के उत्तर दीजिए ।

(21)

क) गाँव के लोगों के जीवन के बारे में मनप्रीत ने क्या बताया?

---

---

---

ख) शतपत्र दूसरे जंगल में क्यों चला गया?

---

---

---

ग) सब चूहे मेयर के पास क्यों गए?

---

---

---

घ) अंगूर मुँह में कैसे आ सकते हैं?

---

---

---

ङ) हॉबी हॉर्स कैसे चलाते हैं?

---

---

---

च) चोर ने गोदाम में चोरी क्यों की?

---

---

---

छ) क्या आलस्य करने से कुछ प्राप्त होता है?

---

---

---

प्र०6. अभ्यास कार्य।

(7)

क) ये वाक्य किसने कहे?

अ) "शतपत्र, आज तुमने मेरे गले की हड्डी का टुकड़ा निकालकर मुझ पर बहुत उपकार किया है। मैं तुम्हें हमेशा याद रखूँगा।"

---

ब) "जी हाँ, महाराज मैंने चोरी की है।"

---

---

ख) वर्ण-विच्छेद कीजिए।

अ) दयालु - \_\_\_\_\_

ग) समान तुक वाले शब्द लिखिए।

अ) फिर - \_\_\_\_\_

ब) दाम - \_\_\_\_\_

घ) सही उत्तर पर सही का निशान लगाइए।

अ) हॉबी हॉर्स किसने बनाए?

मिचैक्स

मैकमिलन

बैटनट्राइस

ब) छत्रपति शिवाजी कैसे शासक थे?

न्यायप्रिय

क्रूर

निर्दयी

ङ) निम्न वाक्यों से रिक्त स्थान भरिए।

अ) मैकमिलन ने ऐसी साइकिल बनाई जिसमें \_\_\_\_\_ भी लगे थे।

च) वाक्य बनाइए।

अ) आलसी - \_\_\_\_\_

---

---

---

क) रिक्त स्थान भरिए।

अ) बोलकर अपनी बात कहना, भाषा का \_\_\_\_\_ रूप कहलाता है।

ब) हिंदी में स्वरों की संख्या \_\_\_\_\_ है।

स) स्वर में मात्राएँ \_\_\_\_\_ होती हैं।

ख) संज्ञा शब्द पर गोला लगाइए।

अ) ताजमहल आगरा में हैं।

ग) सर्वनाम शब्दों से वाक्य बनाइए।

अ) हमारे — \_\_\_\_\_

ब) तुम — \_\_\_\_\_

घ) विशेषण शब्दों पर गोला लगाइए।

अ) मेरे पास दो कार है।

ब) फूल पीला है।

प्र०8. निम्न शब्दों के पुल्लिंग से स्त्रीलिंग रूप लिखिए।

क) पिता — \_\_\_\_\_

ख) मोर — \_\_\_\_\_

प्र०9. निम्न शब्दों को एकवचन से बहुवचन रूप में लिखिए।

क) दीवार — \_\_\_\_\_

ख) लता — \_\_\_\_\_



प्र०10. अशुद्ध शब्दों का शुद्ध रूप लिखिए।

क) इसलीए - \_\_\_\_\_

ख) महमान - \_\_\_\_\_

प्र०11. निम्न शब्दों के पर्यायवाची शब्द लिखिए।

क) दिन - \_\_\_\_\_

ख) आकाश - \_\_\_\_\_

प्र०12. निम्न शब्दों के विलोम शब्द लिखिए।

क) ऊपर - \_\_\_\_\_

ख) अमीर - \_\_\_\_\_

प्र०13. अनेक शब्दों के लिए एक शब्द लिखिए।

क) लालच करने वाला - \_\_\_\_\_

ख) भारत में रहने वाला - \_\_\_\_\_

प्र०14. विराम चिन्ह के नाम लिखिए।

क) ? - \_\_\_\_\_

ख) । - \_\_\_\_\_

प्र०15. निम्न मुहावरों का अर्थ लिखिए।

क) आँखों का तारा

\_\_\_\_\_

ख) फूला ना समाना

\_\_\_\_\_

प्र०16. निम्न गिनतीयों को शब्दों में लिखिए।

क) 3 - \_\_\_\_\_

ख) 20 - \_\_\_\_\_

ज्ञान गुंजन

(5)

प्र०17. नेहरें बनवाने से कौन से दो लाभ हुए?

---

---

---

---

प्र०18. कुत्ते को धोबी क्या खाने के लिए देता था?

---

---

---

---