

SHARDEIN SCHOOL
ANNUAL EXAMINATION (2022-23)
SUBJECT : ART & CRAFT
CLASS – IV

MM : 50
CRAFT : 15


General Instructions :

- a) Attempt all the questions.
- b) Label of your name, class, section on art sheet and craft properly.
- c) Use the medium (colours) as given.


Q1. Draw and colour the scene. (any one) (15)

‘Jungle Scene’ or ‘Swan Scene’

Q2. Colour the given picture. (10)



Q3. Complete the picture using stippling technique with colours. (10)



SHARDEIN SCHOOL
ANNUAL EXAMINATION (2022-23)
SUBJECT : ENGLISH
CLASS – IV

MM : 80

General Instructions:

i) *Attempt all the questions in a neat and clean Handwriting.*

SECTION – A

A1. Unseen Passage: Read the passage given below and answer the following questions. (7)

READ! READ! READ!

Do you want to know what's happening in The Bahamas and the World? Then, pick up a newspaper. Reading the newspaper should be something you do every day. It's the best way to learn about what's happening around you.

Newspapers tell us about our leaders and what happens in our country. Newspapers also tell us about accidents and serious events. There is also a weather page. This page tells us what the weather is going to be like the next day and for the entire week. If you're a sports fan, there is a section that tells you what games are coming up and what teams won the games that have already been played. Newspapers also give you information about jobs that are available. Reading the newspaper is a fun activity. It is also very informative. You should read the Nassau Guardian, The Freeport News, or The Tribune today!

Questions :

a) State TWO reasons people read the newspaper.

b) What information would the reader find in the sports sections of the newspaper?

c) What are the different pages in the newspaper?

d) What kind of activity is newspaper reading?

e) Should newspaper reading be a daily activity?

f) Name some newspapers.

g) Write the antonyms of the following words.

a. day - _____

b. best - _____

A2- Unseen Poem: Read the given poem carefully and answer the following questions. (7)

Changes start to happen here.
The days grow short. It's cold outside.
The birds fly south. The Squirrels hide.
The leaves fall off of all the trees.
The garden pond begins to freeze
Another summer's left behind.
It's winter soon, but I don't mind
For autumn is the time when I
Begin to dream of pumpkin pie.

Answer these questions carefully:

a) Which season comes after autumn?

b) What falls off of the trees?

c) What happens to the garden pond?

d) What does the poet dream about?


e) What season do you like the most?

f) What is left behind?

g) Write two rhyming pair of words from the poem

SECTION – B : (WRITING)

B1. Write a composition on If I had a Superpower.



SECTION – C : (GRAMMAR)

C1. I) Identify and write the sentence type. (½)

a) Who broke the glass?

II) Circle the subject and underline the predicate. (½)

a) The doctor was examining the patients.

C2. Fill in the blanks with suitable Article. (1)

a) Buy her _____ useful gift like _____ book.

C3. Underline the nouns given in sentence and mention its kind (1)

a) Birbal is known for his wisdom.

C4. I) Rewrite the sentence by changing the underlined word as singular / plural. (½)

a) Keep your knife and fork ready on dining table

II) Complete the word with correct gender. (½)

a) God and _____.

b) _____ and peahen.

C5. Fill in the correct Pronoun. (1)

a) _____ are dirty clothes. _____ are clean

C6. Circle the Adverb and tell its type. (1)

a) They are leaving for Canada today.

C7. I) Underline the Adjective and tell its kind. (½)

a) A kind boy helped me.

II) Use of comparative or superlative degree of the given Adjective. (½)

a) Iron is _____ than gold. (useful)

C8. Complete the sentence with correct Verb. (1)

a) She _____ English fluently.

b) We _____ planning for a movie on Sunday

C9. Fill in the blanks with Simple Future tense. (1)

a) The moon shines at night.

C10. Use Past Continuous tense of the given verb to complete the sentence. (1)

a) Mr.Sen _____ all day yesterday. (work)

C11. Punctuate- the sentence. (1)

a) what did you see in agra

C12. Complete the sentence with suitable Preposition. (1)

a) There was a large crowd _____ his house.

C13. I) Use has / have correctly. (1/2)

a) This book _____ ninety six pages.

II) Fill in the blanks suitably with Can /May. (1/2)

a) _____ I sit here for a minute.

C14. Use suitable Conjunction to complete the sentence. (1)

a) Would you like tea _____ coffee?

C15. I) Write the Antonym for the underlined word in the sentence. (1/2)

a) This building seems an ancient structure.

II) Write Synonym for the given word in bracket. (1/2)

a) This movie is very _____ (comical)

C16. I) Add Prefix (1/2)

a) semi _____ , non _____

II) Complete the word with suitable Suffix. (1/2)

a) _____able , _____ist

C17. Choose the correct word for the following statement. (1)

a) A machine used to lift heavy objects-

Scale crane spring lift

C18. Circle the correct Quantifiers. (1)

a) I usually carry a /any/a few comics in my bag.

C19. Write Palindrome for the followings. (1)

a) Past tense of do - _____

b) An organ you use to see - _____

C20. Write the name of the animal associated with given sounds. (1)

a) Chatter - _____

b) Moo - _____

SECTION – D : (LITERATURE) (20)

D1. Name some of the pets that Dr. Dolittle kept.

D2. Why did Spark came out immediately from Rachita's bag?

D3. What is the purpose of the poet in the poem?

D4. Who is the night hiding from?

D5. Why did the ostrich ran away as fast as he could?

D6. How much is Julia s actual salary?

D7. How did Jip ask the questions?

D8. Where did Anna learn about the dogs available for adoption?

D9. What does Julia think of Mistress's children's ability to learn Mathematics?

D10. Why did Divya warn Arti?

SECTION – E : (STORY)

(6)

E1. What was the name of the man bitten by the dog?

E2. What was the jungle of Malad full of?

E3. Who was the master of the dog?

E4. Who were shavers?

E5. Where was the lion lie?

E6. What did the Sun announce?

SHARDEIN SCHOOL
ANNUAL EXAMINATION (2022-23)
SUBJECT : SCIENCE
CLASS – IV

MM : 80

Q1. Multiple choice questions.

(10)

a) Soil pollution makes the soil

a. Fertile

b. Infertile

c. Soft

b) The coldest planet of the solar system is

a. Jupiter

b. Mars

c. Neptune

c) When air moves, it is called

a. Breeze

b. Storm

c. Wind

d) A push or a pull is called

a. Energy

b. Force

c. Work

e) Animals that fly in air are called_____.

a. Aerial

b. Arboreal

c. Amphibians

f) The polar bear lives in a _____ region.

a. Desert

b. Plain

c. Polar

g) A mammal that can fly is

a. Bird

b. Bat

c. Butterfly

h) Hot and dry places are called

a. Deserts

b. Mountains

c. Plains

i) Rotation of the Earth causes

a. Day and night

b. Seasons

c. Summer

j) Pollutants are _____substances.

a. Useful

b. Harmful

c. Clean

Q2. Fill in the blanks.

(10)

- a) The natural home of an animal is called its _____.
- b) _____ is a desert plant.
- c) The wind that blows gently and lightly is called _____.
- d) The tadpole grows into a _____.
- e) Force can change the _____ of an object.
- f) _____ is the smallest planet.
- g) Trees are being cut down for getting _____.
- h) _____ is the ability to do work.
- i) The _____ is the natural satellite of the Earth.
- j) _____ pollution can affect our respiratory system.

Q3. Circle the odd ones. Give reason for your choice.

(10)

- a) Venus Earth Sun

- a) Screw Bicycle Pulley

- b) Cow Tiger Buffalo

c) Frog

Fish

Tadpole

d) Plastic

Metal

Wood

Q4. Give answer in one word.

(5)

a) Name the red planet of the solar system.

b) What is the larva of butterfly called?

c) Name a scavenger.

d) Name a desert plant.

e) Name any one type of pollution.

Q5. Define any four.

(10)

a) Solar System

b) Pollution

c) Evaporation

d) Camouflaging

e) Friction

Q6. Answer the following questions in short.

(10)

a) Why does the moon shine?

b) Why is friction essential for us?

c) Why should we plant trees?

d) Why is frog called an amphibian?

e) What is a desert?

Q7. Answer the following questions in long. (Do any 3)

(15)

a) What is the difference between rotation and revolution of the Earth?

b) Discuss the effects of force.

c) What are endangered animals? Why do we need to protect them?

d) How can we keep the air clean?

Q8. Draw, colour and label the following diagrams. (Do any 2) (10)

- a) Internal structure of an egg
- b) Structure of the Earth
- c) Life cycle of a butterfly
- d) Rotation of the Earth

SHARDEIN SCHOOL
ANNUAL EXAMINATION (2022-23)
SUBJECT : SOCIAL SCIENCE
CLASS – IV

MM : 80

Q1. Multiple choice questions.

(10)

a) The other name of petroleum is

- | | |
|---------------|-----------------|
| a. Black gold | b. Green gold |
| c. Brown gold | d. All of these |

b) Which forest is known as evergreen forest?

- | | |
|------------------------|--------------------|
| a. Tropical rainforest | b. Thorn forest |
| c. Mountain forest | d. Mangrove forest |

c) The Gir National Park protects the

- | | |
|-----------------|-----------------|
| a. Snow leopard | b. Asiatic lion |
| c. Elephant | d. Wild asses |

d) What is a wall built across a river called?

- | | |
|--------------|----------|
| a. Reservoir | b. Dam |
| c. Tubewell | d. Canal |

e) Who was the famous singer at Akbar's Court?

- | | |
|-------------------|------------------|
| a. Mian Tansen | b. Raja Todarmal |
| c. Raja Man Singh | d. Raja Birbal |

f) Who was the first to sail round the world?

- | | |
|-------------------------|---------------------|
| a. Christopher Columbus | b. Vasco da Gama |
| c. Ferdinand Magellan | d. Bartholomew Diaz |

g) Where did Vasco da Gama land in India?

- a. Calicut
- b. Kochi
- c. Jammu
- d. Chennai

h) It was not built by the British.

- a. Rashtrapati Bhavan
- b. Victoria Memorial
- c. Parliament House
- d. Taj Mahal

i) The _____ Day is celebrated on 26 January.

- a. Independence Day
- b. Children's Day
- c. Teachers Day
- d. Republic Day

j) _____ is the head of a municipal corporation.

- a. President
- b. Mayor
- c. Chairperson
- d. Deputy

Q2. Fill in the blanks:

(10)

a) A _____ runs on coal.

b) Jim Corbett National Park was set up to save _____.

c) Mettur Dam is built on river _____.

d) Akbar was the son of _____.

e) _____ was the main ship of Christopher Columbus.

f) The European need _____ from Asia.

g) Ajanta Caves is in _____.

h) _____ and _____ are the official languages.

i) The fundamental rights are _____ in numbers.

j) The _____ build roads.

Q3. Match the columns.

(8)

- | | |
|-----------------------------|------------------------------------|
| a) Steel | Limestone |
| b) Cement | Manganese |
| c) CNG | Oilfield |
| d) Oilwells | Compressed natural gas |
| e) Second battle of Panipat | Advisor to Akbar |
| f) Din-i- Illahi | Akbar became the king |
| g) Raja Birbal | Fought between Mughals and afghans |
| h) 1556 | A religious path |
| | Coal |

Q4. Write T for true or F for false:

(5)

- a) Tehri dam is in Odisha. (_____)
- b) coal and petroleum are used as fuels. (_____)
- c) Hornbill festival of Nagaland is a special festival. (_____)
- d) If our fundamental Rights are denied, we can move Court. (_____)
- e) Mumbai has a Municipal Corporation. (_____)

Q5. Circle the correct answer.

(5)

- a) Tank irrigation is popular in Punjab / Karnataka.
- b) Christopher Columbus discovered the new world / South Africa.
- c) Dances performed on festivals are called classical / folk dances.
- d) In 1947 / 1950 India became a Republic.
- e) Local self-governing bodies collect money through taxes / donation.

Q6. Answer the following questions in very short:-

(5)

a) Write two examples of natural resources.

b) Write two means of irrigation used in India.

c) An area off the coast of Mumbai where petroleum is drilled

d) What are handicrafts?

e) Which is the oldest Municipal Corporation in India?

Q7. Answer in short:-

(12)

a) How is oilfield different from an oil refinery?

b) What is the difference in the way Hindi and Urdu are written?

c) Write any three Fundamental Duties mentioned in our constitution.

d) What is local self government?

Q8. Answer the following questions in detail. (do any 4) (20)

a) What is the difference between exhaustible and inexhaustible resources.

b) What is the difference between evergreen and deciduous trees?

c) How are dams useful to us?

d) What are Directive Principles ?write any two

e) Write five functions performed by local self – governing bodies.

Q9. Map work - mark and label the places on the map of India. (5)

- a) Periyar National park
- b) Gir National park
- c) A coal mining Centre in Jharkhand
- d) A state famous for Bhimbetka cave paintings
- e) A state where Pandavani is popular

SHARDEIN SCHOOL
ANNUAL EXAMINATION (2022-23)
SUBJECT : G.K.
CLASS – IV

MM : 40

Q1. Multiple choice questions.

(5)

a) Which place is known as the “Land of white Elephants“?

- a. Scotland b. Thailand c. Tibet

b) Which is the largest ocean on the earth?

- a. Black sea b. Pacific ocean c. Atlantic Ocean

c) With which sports the term ‘Penalty kick’ associated ?

- a. Golf b. Tennis c. Football

d) Who was the youngest Prime Minister of India?

- a. Dr APJ Abdul Kalam b. Nelson Mandela c. Rajiv Gandhi

e) Which country will host the 2024 Olympics games ?

- a. India b. Tokyo c. France

f) Which is one of the largest container port in the world?

- a. Singapore b. Shanghai c. Casablanca

g) What is the new name of Madras city ?

- a. Mumbai b. Kochi c. Chennai

h) Which lake is known as the ‘Srinagar’s jewel ‘?

- a. Sambhar Lake b. Dal Lake c. Pushkar lake

i) What is the capital of Nagaland ?

- a. Goa b. Kohima c. Tezpur

j) Name the world ‘s longest mountain range on land.

- a. Andes b. Ural c. Himalayas

Q2. Fill in the blanks with correct answer. (10)

- a) The ancient city of _____ is located in now Pakistan
- b) _____ was the first woman ruler in Islamic history.
- c) The highest mountain in Japan _____ is an active volcano.
- d) There are _____ emirates in the United Arab Emirates.
- e) _____ is the planet with rings.
- f) _____ is the writer of the book Grandma's Bag of Stories .
- g) _____ is a medium of exchanging digital messages over a network.
- h) _____ was the old name of the country of Srilanka .
- i) Golden wattle is the national flower of _____.
- j) _____ is the largest inland lake in India.

Q3. Write True or False for the following statements. (5)

- a) Steve jobs was the founder of Netflix. (_____)
- b) Alexander the great was the king of Macedonia and Persia. (_____)
- c) Lord Mahavira is associated with Sikh religion. (_____)
- d) Eclipse occur when Earth,the Moom and the Sun all lie in one line. (_____)
- e) Kochi port is located on the banks of river Thames. (_____)
- f) ATM is used for car navigation system. (_____)
- g) Ear is the smallest muscle in a human body. (_____)
- h) The sports term Frozen ball is used in Cricket. (_____)
- i) An octopus is not a sea animal. (_____)
- j) The Caribbean region is also called the west Indies. (_____)

Q4. Give One word answer for the followings.

(10)

a) The sea in Europe containing almost no life in its bottom layer.

b) The place known as the Land of Golden Pagodas.

c) The major role player in framing the constitution of India.

d) An organ within the cells of plants which conduct photosynthesis.

e) The country with twin peaks of Great Ararat and Little Ararat.

f) The largest planet with seventy nine moons.

g) A short message iploaded on Twitter.

h) The festival celebrated as the New Year's Day of the Parsis.

i) The digital form of book can be read on a computer or other gadget.

j) The lake with the statue of Lord Buddha in the middle of it.

Q5. Match the given columns correctly. (5)

Column A

Column B

- a) George Eastman
- b) Blue Poppy
- c) U-Turn
- d) Summer palace
- e) Gurugram
- f) La tomatina
- g) Vatican City
- h) Easter
- i) Ruskin Bond
- j) Ratan Tata

- Traffic sign
- China
- Decorated eggs
- Bhutan
- Pope
- Mussorie
- Tata Motors
- Spain
- Kodak
- Gurgaon

Q6. Define the followings: (5)

- a) Sobriquet

- b) Eid ul Fitr

c) Hacker

d) Canopy

e) Braille

SHARDEIN SCHOOL
ANNUAL EXAMINATION (2022-23)
SUBJECT : MATHS
CLASS – IV

MM : 80

Q1. Multiple choice questions.

(10)

a) A fraction which has a whole number and a proper fraction is called

- | | |
|-------------------|--------------------|
| a. Mixed Fraction | b. Proper Fraction |
| c. Unit Fraction | d. None of these |

b) A fraction in which the numerator is 1, is called a _____ fraction.

- | | |
|-----------|-------------|
| a. Proper | b. Improper |
| c. Unit | d. Mixed |

c) .845 as a fraction.

- | | |
|-----------------------|------------------------|
| a. $\frac{845}{10}$ | b. $\frac{845}{100}$ |
| c. $\frac{845}{1000}$ | d. $\frac{845}{10000}$ |

d) Rs. 63 - Rs. 4 = Rs. _____

- | | |
|-------|-------|
| a. 60 | b. 61 |
| c. 59 | d. 52 |

e) Basic unit of weight

- | | |
|------|-------|
| a. m | b. g |
| c. l | c. cl |

f) 1 day = _____ hour

- | | |
|-------|---------|
| a. 60 | b. 3600 |
| c. 24 | d. 7 |

g) A _____ has two end points.

- a. Line
- b. Ray
- c. Line-segment
- d. None of these

h) Perimeter of a rectangle = 2 x (_____)

- a. Length + Breadth
- b. Length x Breadth
- c. Length – Breadth
- d. None of these

i) Representing data by cutting a circle into wedges to show difference is called _____.

- a. Pictograph
- b. Pie-graph
- b. Data
- d. None of these

j) 0.11 _____ 1.1

- a. >
- b. <
- b. =
- d. None of these

Q2. Very Short Questions.

(20)

a) Find the sum of $\frac{9}{14}$ and $\frac{4}{7}$.

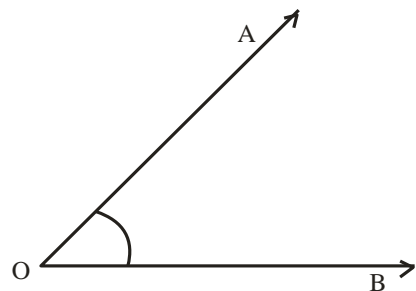
b) Simplify : $8732.231 - 1546.502$

c) A cup and a bowl together cost Rs. 6975. The cup costs Rs. 2455. What does the bowl cost?

d) Change 16g 140mg into mg.

e) Convert 6 hours 35 minutes into minutes.

f) Name the vertex and arms and angle. Name of given figure.



g) Find the area of a rectangle which is 26 cm long and 20 cm broad.

h) Simplify : $\frac{5}{12} + \frac{3}{6} - \frac{3}{18}$

i) Add the sum of 38 km 43 m and 25 km 3 m.

Q3. Short Questions.

(30)

a) Arrange in ascending order : $\frac{1}{4}, \frac{5}{6}, \frac{7}{10}, \frac{1}{2}$

b) You walk $\frac{3}{10}$ of a mile to your friend's house and then $\frac{8}{10}$ of a mile to school. How far did you walk together?

c) i) Write in expanded form : 786.3152

ii) Arrange in ascending order : 222.222 , 0.016 , 808.172 , 7.780

d) Tanu bought 25 apples. If each apple cost Rs. 15. How much did she spend?

e) Change into smaller units and add 25g 10mg and 10g 172mg.

f) Reena takes dance classes everyday for 2 hr 30 min. What time does she spend in two days?

g) Mark centre and draw a circle of 5 cm radius. Find its diameter also.

h) If a boy walks around a square garden. Whose side is 6 km. How much distance will he cover?

i) i) Construct a line segment of 8 cm.

ii) Classify the angle.

a. 120°

b. 90°

c. 21°

j) i) Write number name of 24.54

ii) Write as decimal $\frac{165}{10}$.

iii) Compare 1.34 and 1.20

Q4. Long Questions. (Do any four)

(20)

a) Prepare a bill for the following items.

- a. 5 chocolate bar for Rs. 60 each.
- b. 3 packet of chips for Rs. 20 each.
- c. 2 bottle cold drink for Rs. 30 each.

b) Fill ups.

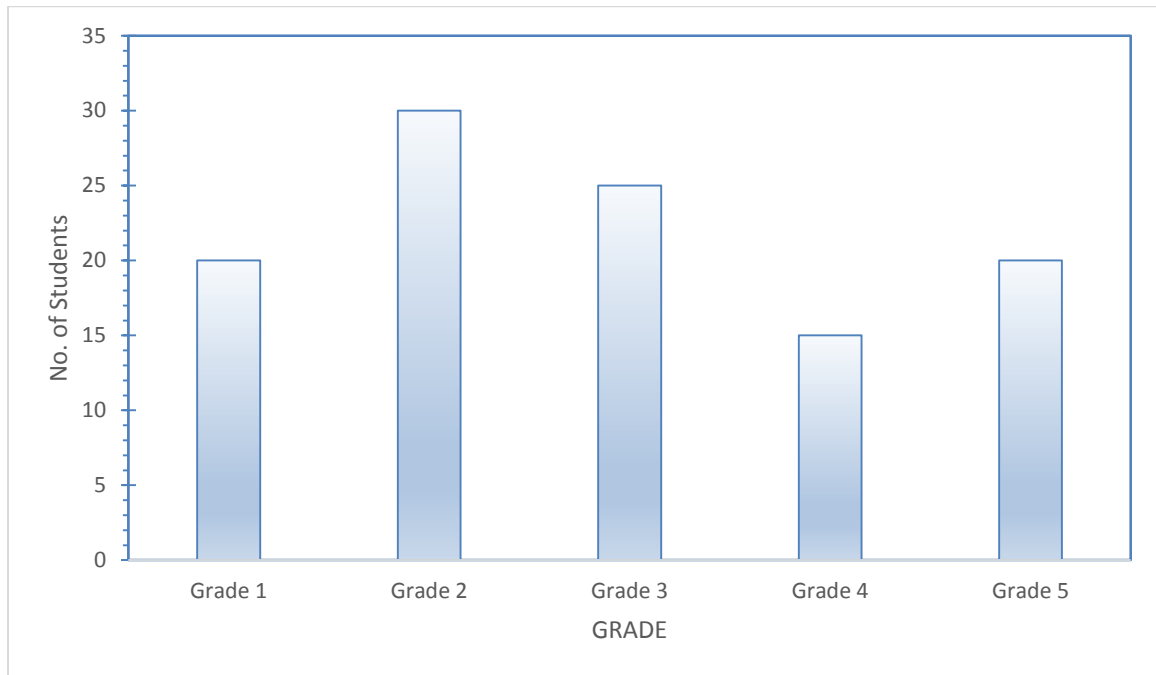
- a. The diameter always passes through the _____ of the circle.
- b. If we join any 2 points of a circle, we get _____.
- c. A line has _____ end points.
- d. If the diameter of a circle is 8 cm, its radius is _____.
- e. The diameter is _____ the radius.

c) i) Find the perimeter of a ΔABC .

If $AB = 40$ cm, $BC = 6$ cm, $CA = 50$ cm

ii) Find the length of the iron wire required to fence a ground whose length is 20 m and breadth 15 m.

d) The bar graph below shows the number of children studying in each grade (class) of a school.



e) Answer the following questions.

a. How many students are there in grade 3?

b. Which grade has the least number of students?

c. Which two classes have the same number of children in them?

d. How many total children are studying in grade 1 and grade 2?

SHARDEIN SCHOOL
ANNUAL EXAMINATION (2022-23)
SUBJECT : HINDI
CLASS – IV

MM : 80

नोट – सभी प्रश्न अनिवार्य हैं। कार्य की स्वच्छता पर विशेष ध्यान दें।

प्र०1. अपठित गद्यांश को पढ़कर प्रश्नों के उत्तर दीजिए। (8)

एक राजा को पशु-पक्षी को पालने का बहुत शौक था। उसने एक बंदर भी पाल रखा था। राजा के मंत्रियों ने एकाध बार प्रार्थना की, कि मंदिर में बंदर में बुद्धि कम होती है, अतः वह बंदर कभी भी राजा को हानि पहुँचा सकता है, पर राजा ने किसी की भी एक न सुनी। वह बंदर भी समझदार और स्वामी भक्त था। एक दिन राजा को निंद आ गई, तो बंदर राजा को हवा करने लगा। बंदर को पंखा जलते देख मंत्रीगण और नौकर-चाकर भी चकित रह गए। तभी बंदर ने देखा कि एक मक्खी बार-बार उड़कर राजा की नाक पर बैठ जाती। क्रोध में आकर बंदर ने तलवार निकाल ली और जैसे ही मक्खी राजा की नाक पर बैठी, बंदर ने उस पर तलवार से वार किया। मक्खी तो उड़ गई पर राजा की नाक कट गई।

क) राजा किस बात का शौकीन था?

ख) बंदर की क्या विशेषता थी?

ग) बंदर क्या कर रहा था?

प्र०4. शब्दार्थ ।

(8)

उत्साह _____ सन्नाटा _____

ढेला _____ साहस _____

उन्नति _____ प्रवीण _____

उत्सव _____ प्रांगण _____

प्र०5. निम्नलिखित प्रश्नों के उत्तर लिखिए ।

(21)

क) चांद की ओर जाते हुए साक्षी ने क्या देखा?

ख) स्वर्ग में चारों ओर सन्नाटा क्यों छाया था?

ग) कविता (संगति का फल) में किस पौधे का वर्णन हुआ है?

घ) आर्यन की माँ जीवन निर्वाह कैसे करती थी?

ङ) विल्मा के जन्म के समय कौन सी नीति जोरों पर थी?

च) राजस्थान को कौन-सी नगरी के रूप में जाना जाता है?

छ) युवल को विद्यालय पहुँचने में देर क्यों हो गई?

1) सही उत्तर चुनकर सही का निशान लगाइए।

क) विल्मा को किस देश के उपराष्ट्रपति ने ऑपरेशन चैंप में भाग लेने के लिए बुलाया?

जापान के

भारत के

अमेरिका के

ख) इनमें से कौन सा राष्ट्रीय त्योहार नहीं है।

5 सितंबर

15 अगस्त

26 जनवरी

ग) हमारा संविधान कब बना था?

2 अक्टूबर

14 सितंबर

26 जनवरी

घ) सही शब्द चुनकर खाली स्थान भरिए। (गद्दीदार / संगीत प्रेमी / किलों)

राजस्थान के लोग _____ होते हैं।

ङ) किसने कहा? किससे कहा?

अ) तुमने बहुत ही नेक काम किया है।

ब) "अपना काम पूरा कैसे करूँगा"।

व्याकरण

प्र०7. निर्देशानुसार पूर्ण कीजिए।

(20)

- 1) भाषा के दो रूप होते हैं – मौखिक और _____।
- 2) संयुक्त व्यंजन _____ व्यंजनों के मेल से बनते हैं।
- 3) वर्णों को सही क्रम में लिखकर सार्थक शब्द बनाइए।

फु वा री ल – _____

- 4) निम्नलिखित वाक्य में उद्देश्य लिखकर वाक्य पूरा कीजिए।

_____ पतंग उड़ा रहा है।

- 5) दिए गए वाक्यों में से संज्ञा शब्द छाँट कर लिखिए।

अ) ताजमहल बहुत सुंदर है। _____

ब) सचिन तेंदुलकर ने देश का नाम रोशन किया है। _____

- 6) लिंग बदलिए।

अ) घोड़ा – _____

ब) राजा – _____

- 7) उचित वचन भरिए।

अ) अलमारी में रखे हैं _____ भिनभिनाएंगी। (कपड़ा/कपड़े)

ब) _____ को कभी नहीं काटना चाहिए। (पेड़/पेड़ों)

- 8) निम्नलिखित वाक्य में उचित सर्वनाम भरिए।

अ) _____ लखनऊ कब जाओगे? (हम/आप/मैं)

ब) _____ मेरी फुटबॉल है। (मैं/यह/तुम)

9) नीचे लिखे विशेषण शब्दों के लिए उचित विशेष्य लिखिए।

अ) दो मीटर - _____

ब) ऊँचा - _____

10) रिक्त स्थान में क्रिया का उचित रूप भरिए।

अ) मोहित क्रिकेट _____ है। (खेलना)

11) विलोम शब्द लिखिए।

अ) असली - _____

ब) दोस्त - _____

12) समानार्थी शब्द लिखिए। (दो)

अ) सूर्य - _____

प्र०8. अनेक 7 अभ्यास कार्य।

(6)

सही उत्तर चुनिए।

1) विल्मा ने ओलंपिक खेल में तीन स्वर्ण पदक कब जीते।

1962 में

1960 में

1965 में

2) इनमें से कौन सा राष्ट्रीय त्योहर नहीं है।

5 सितंबर

15 अगस्त

26 जनवरी

3) स्वतंत्र दिवस कब मनाया जाता है।

26 जनवरी

15 सितंबर

15 अगस्त

4) सही शब्द चुनकर खाली स्थान भरिए। (गद्दीदार/संगीत प्रेमी/किलों)

अ) ऊँट के पैर _____ होते हैं।

5) किसने कहा? किससे कहा?

अ) तुमने बहुत ही नेक काम किया है।

ब) तुम स्वयं को अकेला मत समझो।

6) निम्नलिखित के लिए एक शब्द लिखो।

अ) जो सदा सत्य बोलता हो।

7) उचित स्थान पर विराम चिन्ह लगाइए।

अ) वाह मेरी नई पोशाक आ गई

8) नीचे दिए गए अशुद्ध शब्दों को शुद्ध रूप में लिखिए।

अ) दुध

—

ब) वायू

—

9) नीचे दिए गए मुहावरों का अर्थ लिखिए।

अ) चार चाँद लगाना

ज्ञान गुंजन

प्र०9. निम्नलिखित प्रश्नों के उत्तर दीजिए।

(5)

1) पार्वती के कन्या रूप का विवाह किससे होना निश्चित हुआ?

2) हिलते हुए पौधे हज़ारी बाबा को कैसे लगते थे?
