

SHARDEIN SCHOOL
UNIT - I EXAMINATION (2025-26)
SUBJECT : ART
CLASS – I

MM : 15


General Instructions :

- a) *Attempt all the questions.*
- b) *Label your name, class, roll number and section on art sheet.*
- c) *Your work must be done neatly and clearly.*

Q1. Draw and colour the scene. (10)

“House Scene”

Q2. Colour the given picture. (5)



SHARDEIN SCHOOL
UNIT - I EXAMINATION (2025-26)
SUBJECT : ENGLISH
CLASS – I

MM : 25

Q1. Answer the following questions. (4)

a) What is in the box?

a) Where is Karan?

Q2. Fill with 'What is' or 'What are': (2)

a) _____ this?

It is a pen.

b) _____ these?

These are snails.

Q3. Circle the correct words: (1)

a) Amit is a boy / girl.

b) Honey is sweet / salty.

Q4. Circle the odd one. (1)

a) Bun Bag Box Bottle

b) Goat Cow Tree Horse

Q5. Write the names of these pictures. (1)

a)  - _____

b)  - _____

Q6. Fill is / am / are: (1½)

a) He _____ in the park.

b) I _____ reading a book.

c) You _____ my friend.

Q7. Fill has / have. (1½)


a) I _____ many toys.


b) We _____ a meeting today.


c) She _____ ten balloons.


Q8. Fill with This / That / These / Those:

(4)

a)  _____ is pen.

b) _____ are trees. 

c)  _____ are books.

d) _____ is an apple. 

Q9. Write opposites.

(1½)

a) Happy - _____

b) Hot - _____

c) Fat - _____

Q10. Check the genders.

(1)

a) Cock - _____

b) King - _____

Q11. Write plurals:

(1½)

a) Chair - _____

b) Book - _____

c) Fan - _____

SHARDEIN SCHOOL
UNIT - I EXAMINATION (2025-26)
SUBJECT : G.K.
CLASS – I

MM : 15

Q1. Name them. (10)

a) 2 Vegetables - _____ , _____

b) 2 Flowers - _____ , _____

c) 2 Bird's sound - _____ , _____

Q2. Tick the correct option. (3)

a) The sound of owl

Hum

Cluck

Hoot

b) The baby of lion is _____.

Fawn

Cub

Calf

c) Trees gives us _____.

Sun

Hen

Medicine

Q3. Write True or False. (2)

a) Cleaning rivers is eco-friendly. (_____)

b) Trees provide shelter from the sun. (_____)

c) Blue dustbin is for wet waste. (_____)

d) Turnip is a fruit. (_____)

Q4. Fill in the blanks

(2)

a) _____ can be reused.

b) _____ blossom on the trees.

Q5. Match the following.

(5)

a) Blue dustbin

Fawn

b) Cleaning the roads

Flowers name

c) Carrot

Calf

d) Elephant

Dry waste

e) Rose

Vegetable


f) Deer

Eco friendly

Q6. Identify the picture.

(2)

a)



- _____

b)




- _____

c) The rabbit is _____ the hat.

i) inside

ii) over



d) The cat is going _____ the stairs.

i) up

ii) down



Q5. Write before, after and between.

(1½)

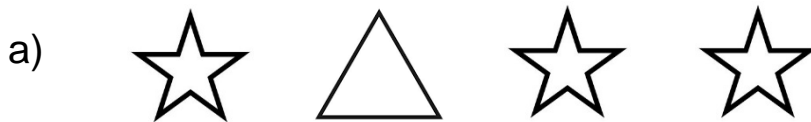
a) _____ 14

b) 7 _____ 9

c) 9 _____

Q6. Circle the odd one out.

(2)



Q7. Write next 4 numbers.

(1)

a) 19, _____, _____, _____, _____

Q8. Solve it.

(2)

a)
$$\begin{array}{r} 2 \\ + 6 \\ \hline \\ \hline \end{array}$$

c)
$$\begin{array}{r} 3 \\ + 5 \\ \hline \\ \hline \end{array}$$

b)
$$\begin{array}{r} 7 \\ + 3 \\ \hline \\ \hline \end{array}$$

d)
$$\begin{array}{r} 3 \\ + 6 \\ \hline \\ \hline \end{array}$$

Q9. Put the correct sign > , < or =

(1½)

a) 5 _____ 8

c) 9 _____ 9

b) 9 _____ 2

Q10. Circle the largest number.

(1)

a) 6 , 10 , 12 , 18

Q11. Circle the correct number.

(1)

a) _____ comes between 11 and 12.

10 , 13 , 17

Q12. Count and write the number.

(1)



T O

Q13. Fill the missing numbers.

a) 6 _____ 8 _____ 10

Q14. Write the backward counting. (1)

a) 14 , _____ , _____ , 11 , _____ , 9 , _____ , _____

Q15. Complete the tables. (1)

a) $3 \times 8 =$ _____

b) $2 \times 4 =$ _____

Q16. Complete the flower addition. (1)



Q17. Word Problems. (2)

a) Mary had 5 oranges and 3 bananas. How many fruits does she have?

T O

b) Jack has 5 buckets. Jill has 4 buckets. How many in all?

T O

SHARDEIN SCHOOL
UNIT - I EXAMINATION (2025-26)
SUBJECT : EVS
CLASS – I

MM : 25

Q1. Name them: (6)

a) 2 sense organs - _____ , _____

b) 2 favourite fruits - _____ , _____

c) 2 external organs - _____ , _____

d) 2 types of families - _____ , _____

e) 2 junk food - _____ , _____

f) 2 food from plants - _____ , _____

Q2. Write True or False. (3)

a) Family members never go out on picnics. (_____)

b) Our sense organs help us to know about the things around us.
(_____)

Q3. Fill in the blanks: (3)

a) Fruits and vegetables are obtained from _____.

b) My mother and father are my _____.

c) The largest sense organ is _____.

d) I study in _____ school.

e) We should _____ food properly.

f) We have _____ sense organs.

Q4. Tick the correct option. (2)

a) _____ is the morning meal.

i) Lunch

iii) Breakfast

ii) Dinner

b) We speak with the help of our _____.

i) Tongue

iii) Nose

ii) Eyes

Q5. Match the following. (2)

a) Dinner

animal

b) Nuclear family

night

c) Egg

hear

d) Ears

small family

Q6. Answer the following questions. (4)

a) Write 2 good eating habits.

b) What is a nuclear family?

c) How many eyes and ears do you have?

d) Name the 4 types of tastes that we can taste with our tongue.

Q7. Write 4 lines on Myself.

(2)

Q8. Draw, name and colour any 2 healthy food.


(5)

SHARDEIN SCHOOL
UNIT - I EXAMINATION (2025-26)
SUBJECT : HINDI
CLASS - I

MM : 25

प्र०1. चित्र देखकर पहला वर्ण लिखो।

(1/2)



प्र०2. चित्र देखकर उचित मात्रा लगाइए।

(1/2)



गलास



घड़

प्र०3. गिनती शब्दों में लिखो।

(1)

क) ५ —

ख) ८ —

प्र०4. वर्णमाला पूरी करो।

(2)

क) ट , _____ , _____ , _____ , _____

प्र०10.मेल मिलाओ ।

(2)

- | | |
|-------------------|-----------|
| क) बुलबुल | दादी जी |
| ख) पापा की मम्मी | दाना |
| ग) चिड़िया | नानी जी |
| घ) मम्मी की मम्मी | मीठा गाना |

प्र०11.प्रश्नों के उत्तर दीजिए ।

(2)

क) रिमझिम-रिमझिम क्या आ गई?

ख) बच्चे का क्या नाम है?

प्र०12.अनुच्छेद लिखिए – 'मेरा भाई' या 'मेरी दादी'

(5)

